



แบบฝึกหัด ตรีโกณมิติ

ชื่อ-นามสกุล

เลขประจำตัว

จงเขียนมุมในข้อ T01 ถึง T20 ในตำแหน่งมาตรฐาน

T01.

T02.

T03.

T04.

T05.

T06.

T07.

T08.

T09.

T10.

T11.

T12.

T13.

T14.

T15.

T16.

T17.

T18.

T19.

T20.

ข้อ T21 ถึง T44 จงหาค่าตรีโกณมิติ

T21.

T22.

T23.

T24.

T25.

T26.

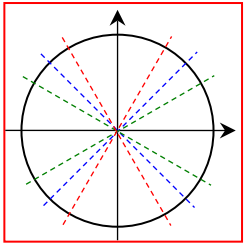
T27.

T28.

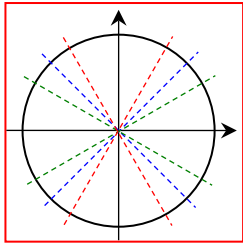
T29.

T30.

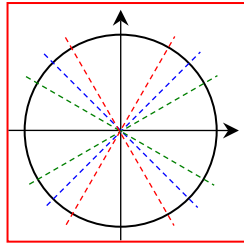
T31.



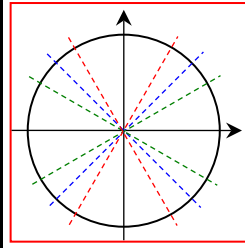
T32.



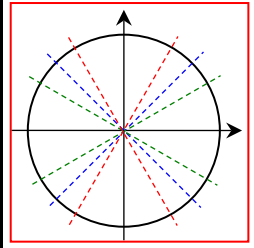
T33.



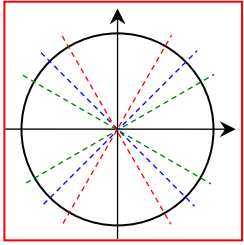
T34.



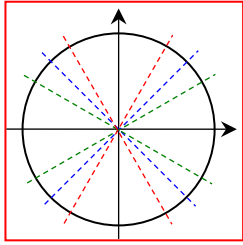
T35.



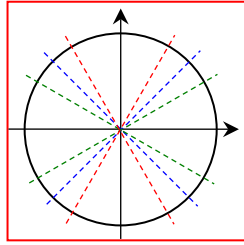
T36.



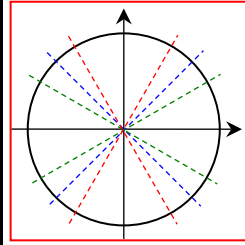
T37.



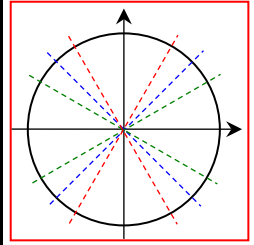
T38.



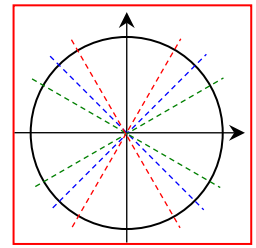
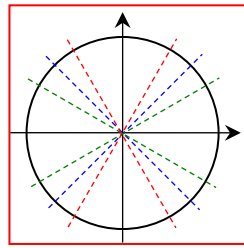
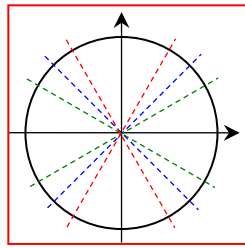
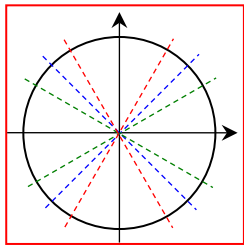
T39.



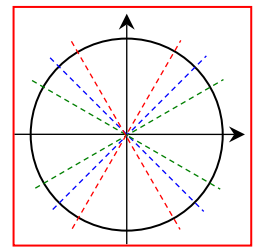
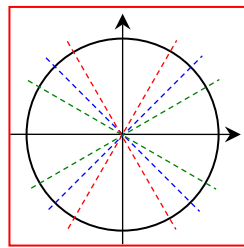
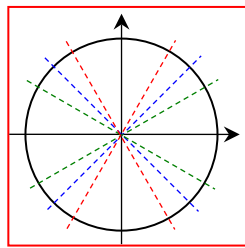
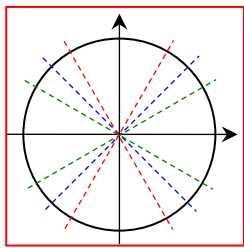
T40.



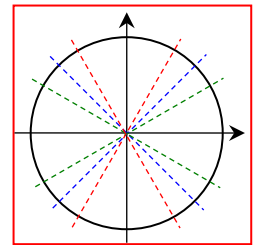
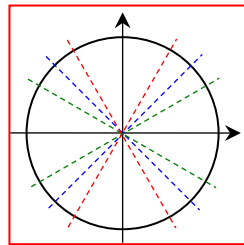
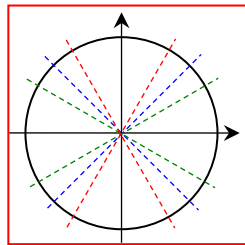
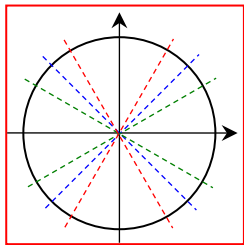
T41.



T42.



T43.



T44.

